

# DESKOMPOSAKETA SUMBLOX



## MATERIALAREN ESKAINTZAK:

- 1.Sumblox piezekin batuketak egiteko txartelak.
- 2.Sumblox piezekin kenketak egiteko txartelak.
- 3.Deskonposizioa lantzeko txantiloiak.
- 4.Deskonposizioa lantzeko fitxak

# SUMBLOXEKIN BATUKETAK

$$\_ + 3 = \_$$

nuestraclasedeprimero

$$\_ + 3 = 4$$

$$6 + \_ = \_$$

nuestraclasedeprimero

$$6 + \_ = 7$$

$$2 + 8 = \_$$

nuestraclasedeprimero

$$2 + 8 = 10$$

$$4 + 3 = \_$$

nuestraclasedeprimero

$$4 + 3 = 7$$

$$9 + \_ = \_$$

nuestraclasedeprimero

$$9 + \_ = 10$$

$$6 + 3 = \_$$

nuestraclasedeprimero

$$6 + 3 = 9$$

# SUMBLOXEKIN BATUKETAK

$$1 + 5 = \underline{\quad}$$

nuestraclasedeprimero

$$1 + 5 = \underline{6}$$

$$4 + 5 = \underline{\quad}$$

nuestraclasedeprimero

$$4 + 5 = \underline{9}$$

$$2 + 6 = \underline{\quad}$$

nuestraclasedeprimero

$$2 + 6 = \underline{8}$$

$$5 + 5 = \underline{\quad}$$

nuestraclasedeprimero

$$5 + 5 = \underline{10}$$

$$3 + 3 = \underline{\quad}$$

nuestraclasedeprimero

$$3 + 3 = \underline{6}$$

$$\underline{\quad} + \underline{\quad} = \underline{\quad}$$

nuestraclasedeprimero

$$\underline{\quad} + \underline{\quad} = \underline{2}$$

# SUMBLOXEKIN KENKETAK

$$4 - 3 = \underline{\quad}$$

nuestraclasedeprimero

$$4 - 3 = \underline{1}$$

$$7 - \underline{\quad} = \underline{\quad}$$

nuestraclasedeprimero

$$7 - \underline{1} = \underline{6}$$



$$10 - 8 = \underline{\quad}$$

nuestraclasedeprimero

$$10 - 8 = \underline{2}$$

$$7 - 3 = \underline{\quad}$$

nuestraclasedeprimero

$$7 - 3 = \underline{4}$$



$$10 - \underline{\quad} = \underline{\quad}$$

nuestraclasedeprimero

$$10 - \underline{1} = \underline{9}$$

$$9 - 3 = \underline{\quad}$$

nuestraclasedeprimero

$$9 - 3 = \underline{6}$$

# SUMBLOXEKIN KENKETAK

$$6 - 5 = \underline{\quad}$$

$$9 - 5 = \underline{\quad}$$

nuestraclasedeprimero

$$6 - 5 = \underline{1}$$

nuestraclasedeprimero

$$9 - 5 = \underline{4}$$

$$8 - 6 = \underline{\quad}$$

$$10 - 5 = \underline{\quad}$$

nuestraclasedeprimero

$$8 - 6 = \underline{2}$$

nuestraclasedeprimero

$$10 - 5 = \underline{5}$$

$$6 - 3 = \underline{\quad}$$

$$2 - \underline{\quad} = \underline{\quad}$$

nuestraclasedeprimero

$$6 - 3 = \underline{3}$$


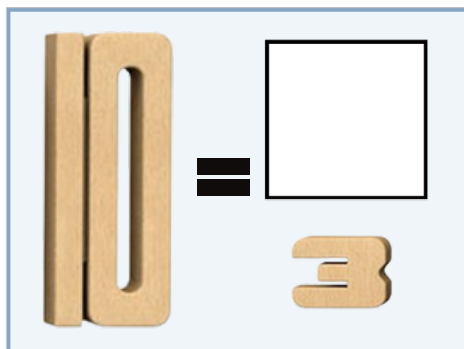
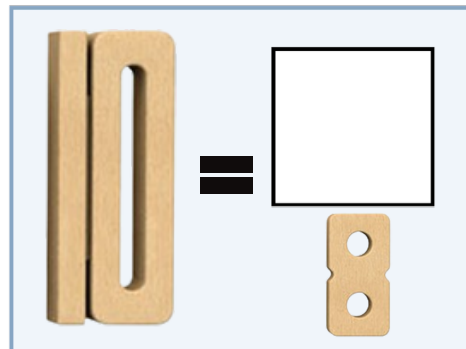
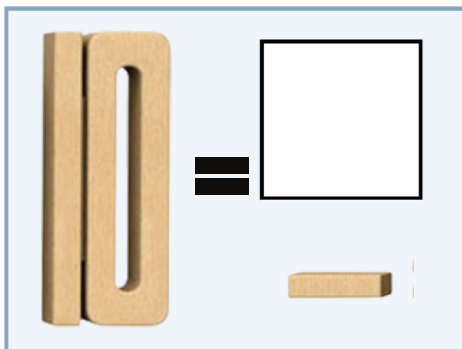
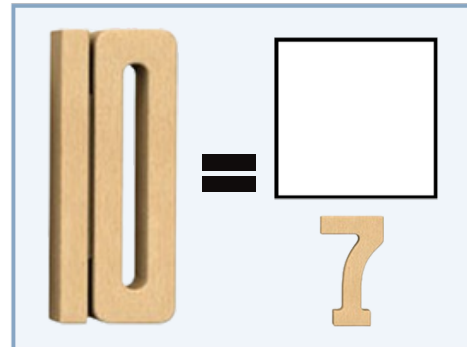
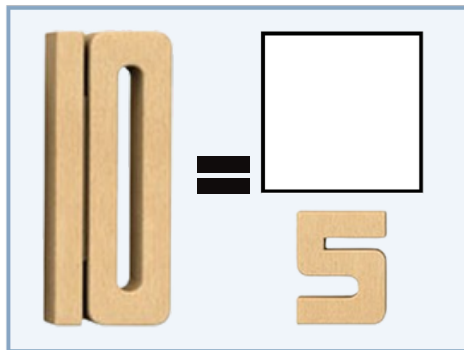
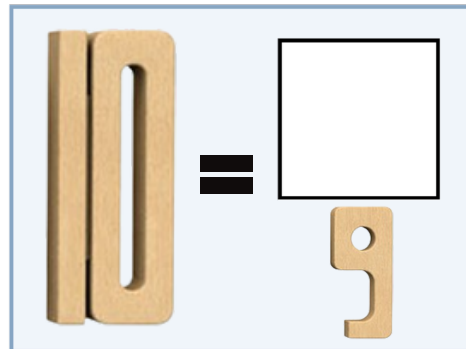
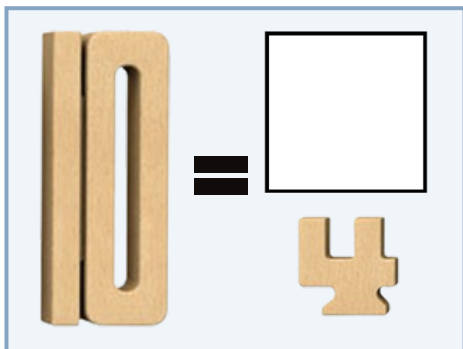
nuestraclasedeprimero

$$2 - \underline{\quad} = \underline{\quad}$$

# DESKOMPOSAKETA SUMBLOXEKIN

## JARRAIBIDEAK:

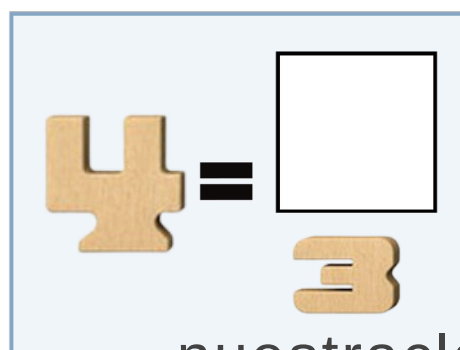
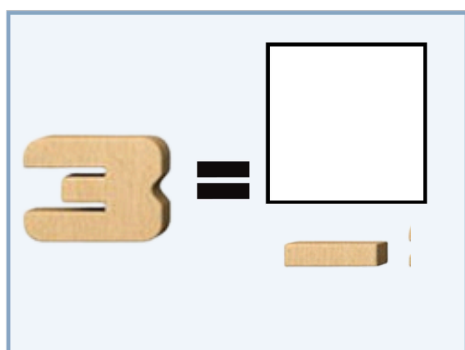
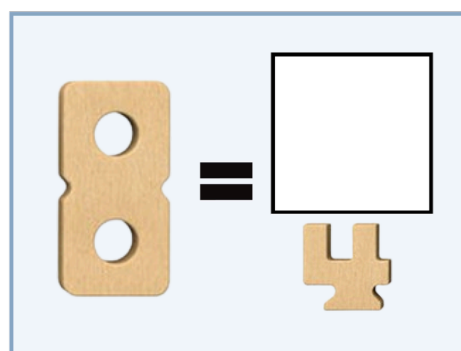
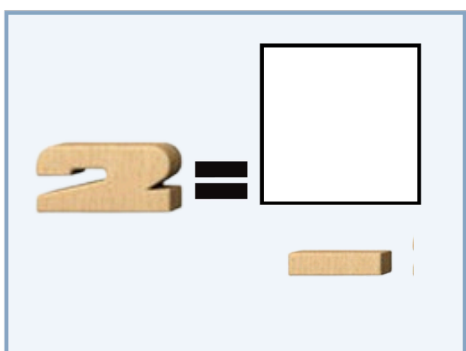
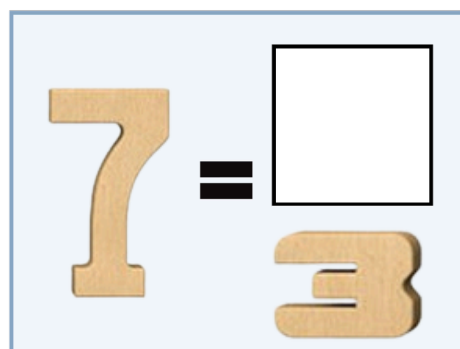
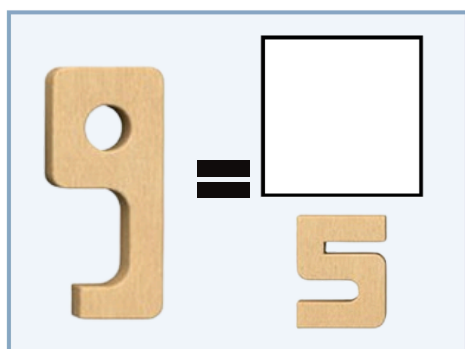
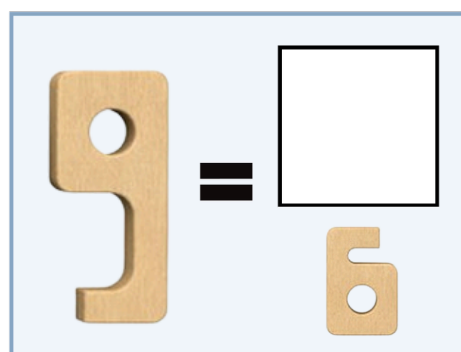
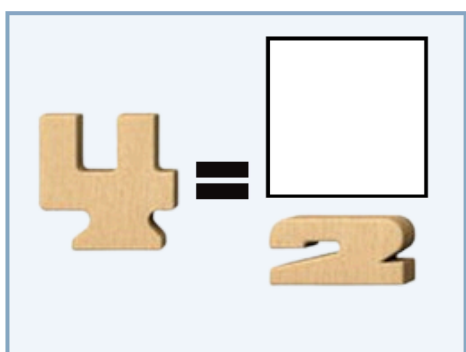
1. Begiratu zenbakiei eta hasi haiekin jolasten. Aurkitu zein zenbaki falta den 10 osatzeko.
2. Nahi baduzu, bertsio apur bat sinpleagoa edo haurrentzako egokiagoa ere presta dezaket.



# DESKOMPOSAKETA SUMBLOXEKIN

## JARRAIBIDEAK

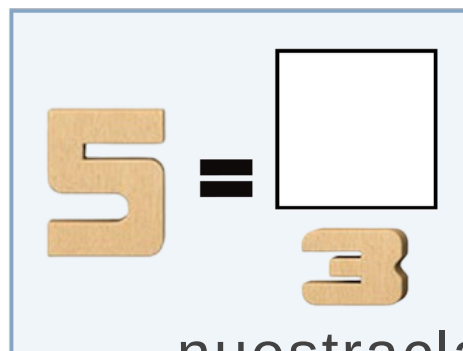
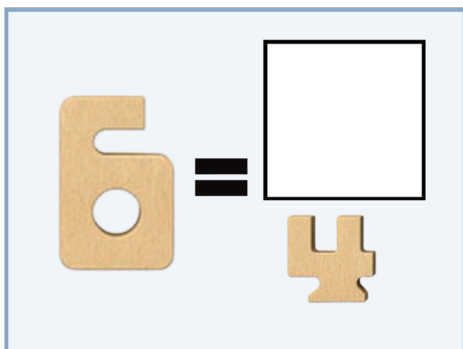
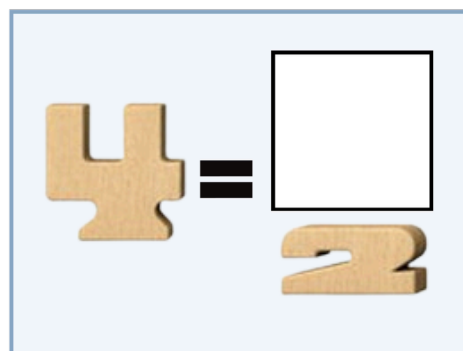
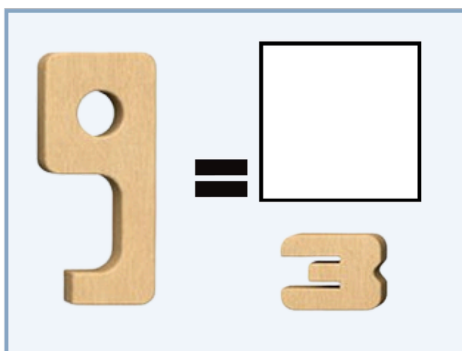
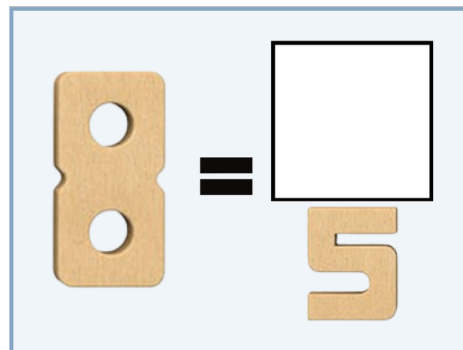

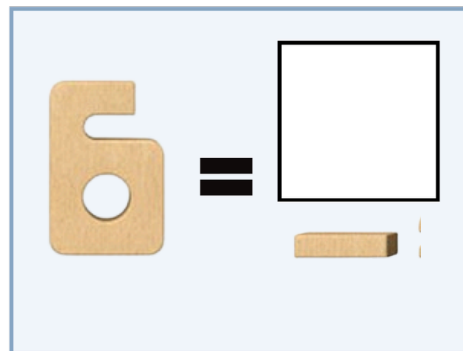
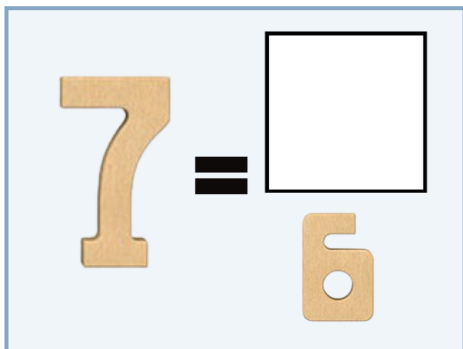
1. Begiratu zenbakiei eta hasi haiekin jolasten.
2. Aurkitu zenbaki handia osatzeko falta den zenbakia.



# DESKOMPOSAKETA SUMBLOXEKIN

## JARRAIBIDEAK

1. Begiratu zenbakiei eta hasi haiekin jolasten.
2. Aurkitu zenbaki handia osatzeko falta den zenbakia.




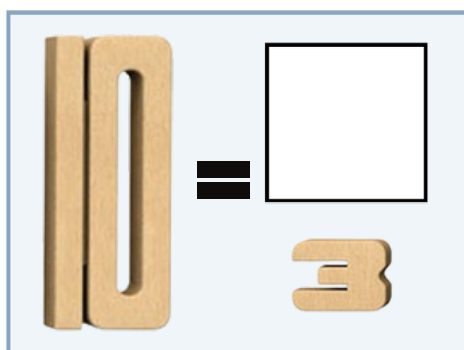
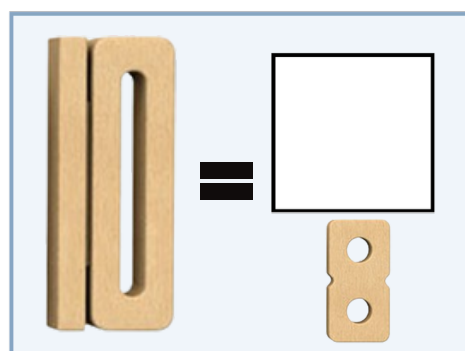
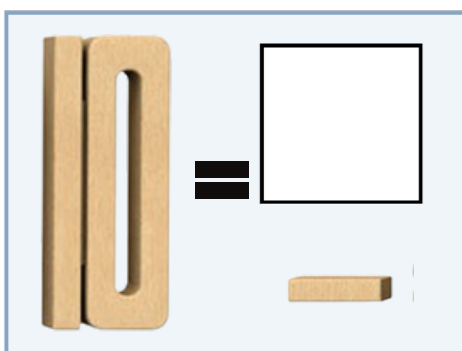
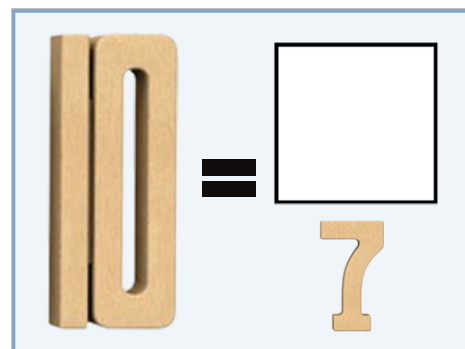
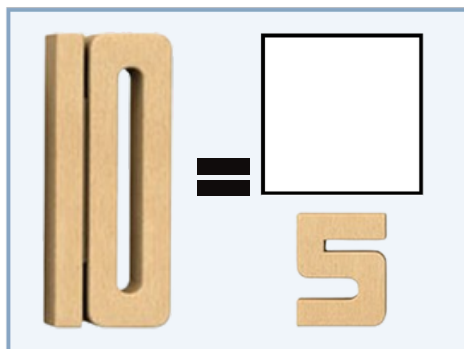
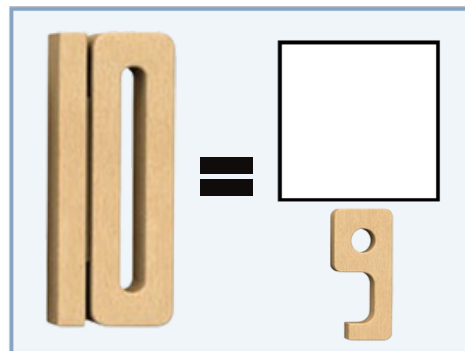
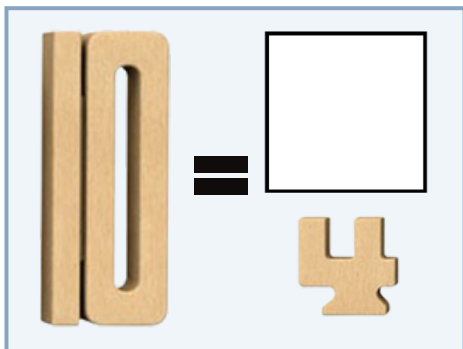
IZENA:

DATA:

# DESKOMPOSAKETA SUMBLOXEKIN

## JARRAIBIDEAK

1. Begiratu zenbakiei eta jolastu
2. Zein zenbaki falta da 10 osatzeko?



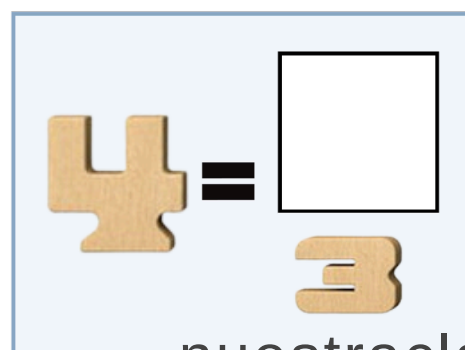
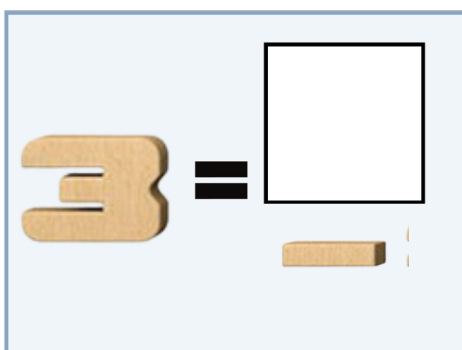
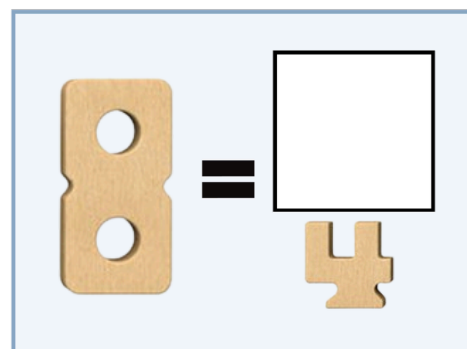
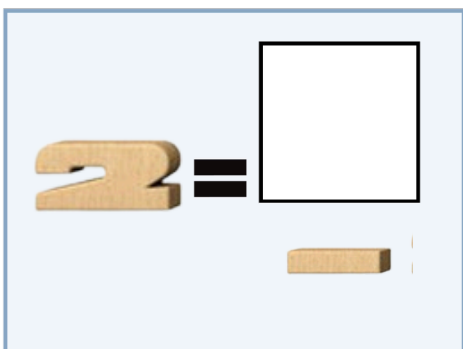
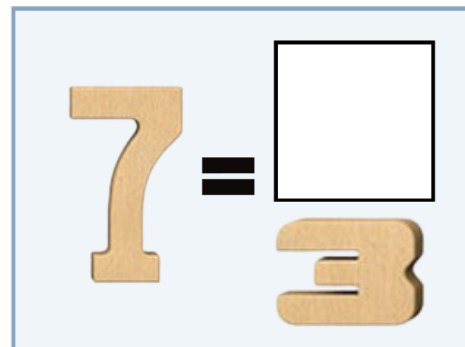
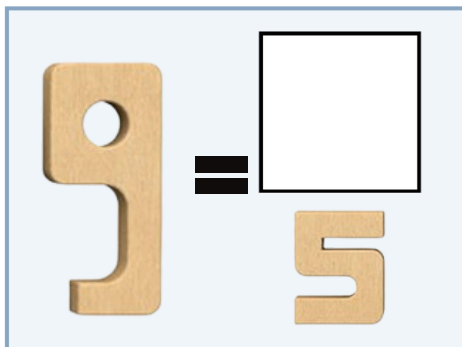
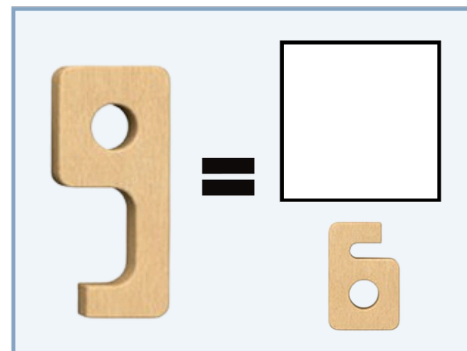
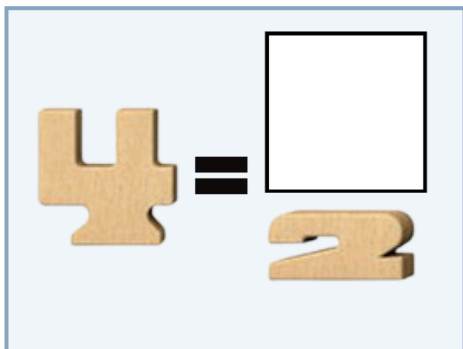
IZENA:

DATA:

# DESKOMPOSAKETA SUMBLOXEKIN

## JARRAIBIDEAK

1. Begiratu zenbakiei eta jolastu.
2. Zein zenbaki falta da zenbaki handia osatzeko?



IZENA:

DATA:

# DESKOMPOSAKETA SUMBLOXEKIN

## JARRAIBIDEAK

1. Begiratu zenbakiei eta jolastu.
2. Zein zenbaki falta da zenbaki handia osatzeko?

