

# DESCOMPONEM AMB SUMBLOX



## AQUEST PAQUET INCLOU:

1. Targetes per sumar amb peces de Sumblox.
2. Targetes per restar amb peces de Sumblox.
3. Plantilles per treballar la descomposició.
4. Fites per treballar la descomposició.

# SUMES AMB SUMBLOX


$$\_ + 3 = \_$$

$$6 + \_ = \_$$

nuestraclasedeprimero 

$$\_ + 3 = \underline{4}$$

nuestraclasedeprimero 

$$6 + \_ = \underline{7}$$
 


$$2 + 8 = \_$$

$$4 + 3 = \_$$

nuestraclasedeprimero 

$$2 + 8 = \underline{10}$$

nuestraclasedeprimero 

$$4 + 3 = \underline{7}$$
 

$$9 + \_ = \_$$

$$6 + 3 = \_$$

nuestraclasedeprimero 

$$9 + \_ = \underline{10}$$

nuestraclasedeprimero 

$$6 + 3 = \underline{9}$$

# SUMES AMB SUMBLOX

$$1 + 5 = \underline{\quad}$$

$$4 + 5 = \underline{\quad}$$

nuestraclasedeprimero 

$$1 + 5 = \underline{6}$$

nuestraclasedeprimero 

$$4 + 5 = \underline{9}$$

$$2 + 6 = \underline{\quad}$$

$$5 + 5 = \underline{\quad}$$

nuestraclasedeprimero 

$$2 + 6 = \underline{8}$$

nuestraclasedeprimero 

$$5 + 5 = \underline{10}$$

$$3 + 3 = \underline{\quad}$$

$$1 + 1 = \underline{\quad}$$

nuestraclasedeprimero 

$$3 + 3 = \underline{6}$$

nuestraclasedeprimero 

$$1 + 1 = \underline{2}$$

# RESTES AMB SUMBLOX

$$4 - 3 = \underline{\quad}$$

nuestraclasedeprimero 

$$4 - 3 = \underline{1}$$

$$7 - \underline{\quad} = \underline{\quad}$$

nuestraclasedeprimero 

$$7 - \underline{1} = \underline{6}$$

$$10 - 8 = \underline{\quad}$$

nuestraclasedeprimero 

$$10 - 8 = \underline{2}$$

$$7 - 3 = \underline{\quad}$$

nuestraclasedeprimero 

$$7 - 3 = \underline{4}$$

$$10 - \underline{\quad} = \underline{\quad}$$

nuestraclasedeprimero 

$$10 - \underline{1} = \underline{9}$$

$$9 - 3 = \underline{\quad}$$

nuestraclasedeprimero 

$$9 - 3 = \underline{6}$$

# RESTES AMB SUMBLOX

$$6 - 5 = \underline{\quad}$$

nuestraclasedeprimero 

$$6 - 5 = \underline{1}$$

$$9 - 5 = \underline{\quad}$$

nuestraclasedeprimero 

$$9 - 5 = \underline{4}$$

$$8 - 6 = \underline{\quad}$$

nuestraclasedeprimero 

$$8 - 6 = \underline{2}$$

$$10 - 5 = \underline{\quad}$$

nuestraclasedeprimero 

$$10 - 5 = \underline{5}$$

$$6 - 3 = \underline{\quad}$$

nuestraclasedeprimero 

$$6 - 3 = \underline{3}$$

$$2 - \underline{\quad} = \underline{\quad}$$

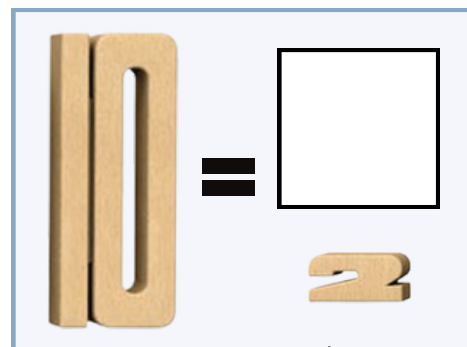
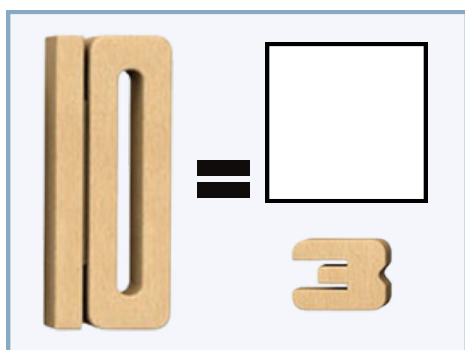
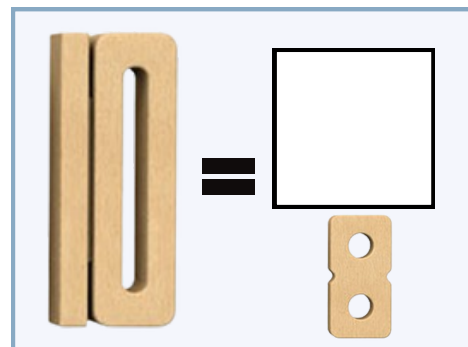
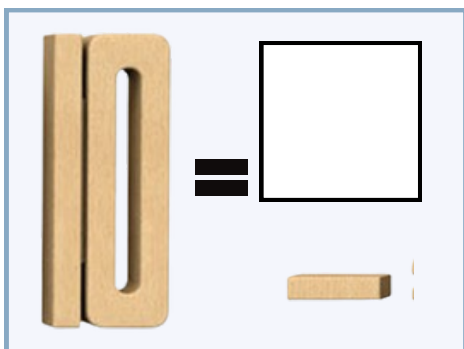
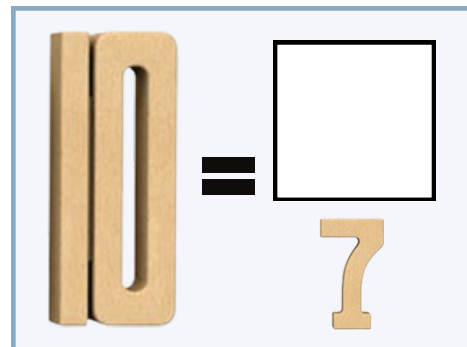
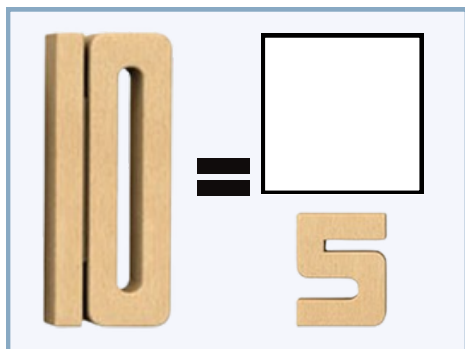
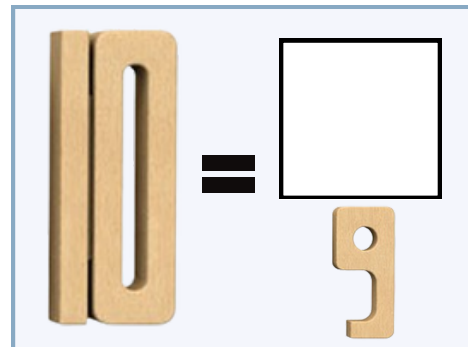
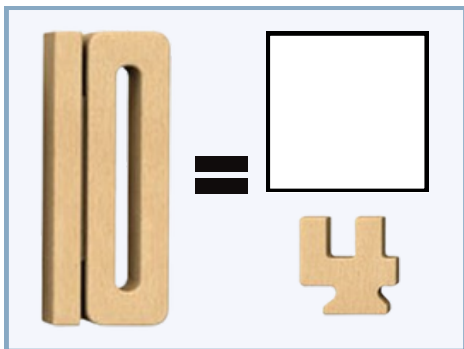
nuestraclasedeprimero 

$$2 - \underline{\quad} = \underline{\quad}$$

# DESCOMPONEM AMB SUMBLOX

## INSTRUCCIONS

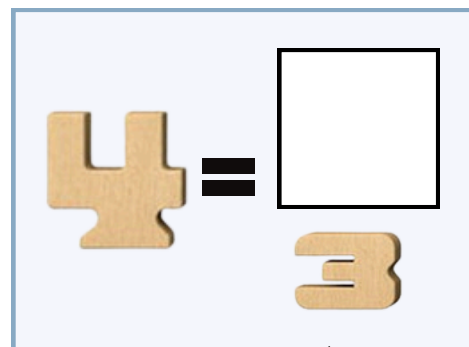
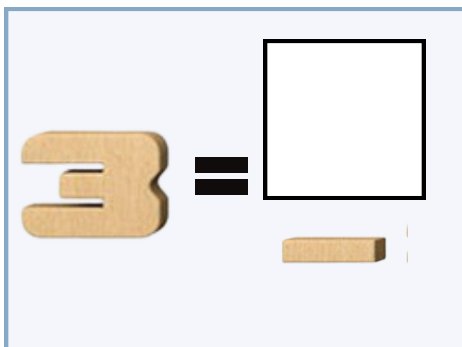
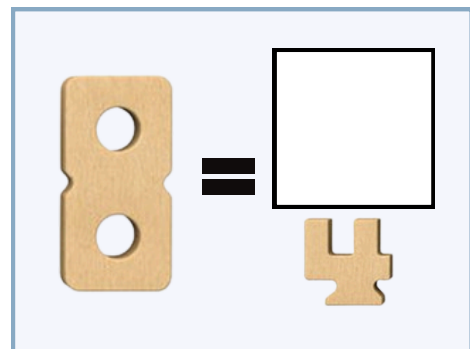
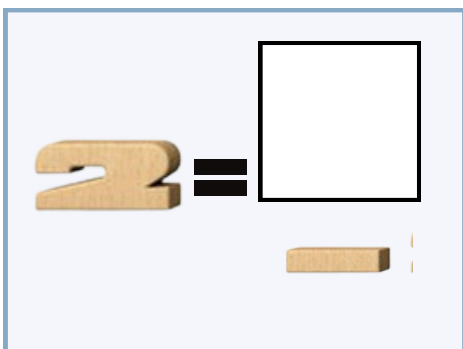
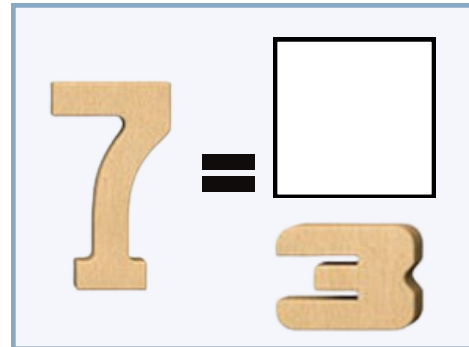
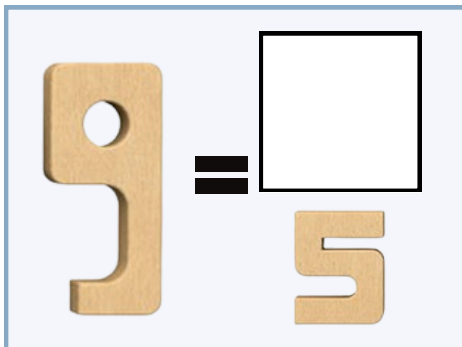
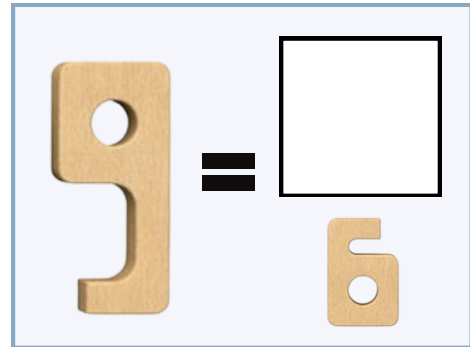
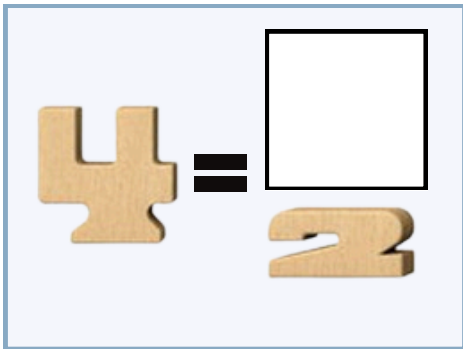
1. Observa els números i comença a jugar amb ells.
2. Esbrina quin número falta per formar el 10.



# DESCOMPONEM AMB SUMBLOX

## INSTRUCCIONS

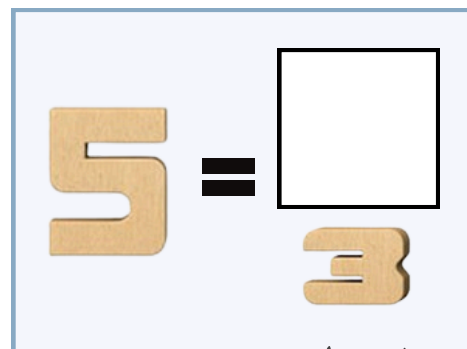
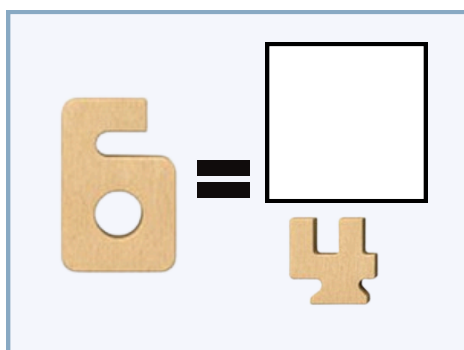
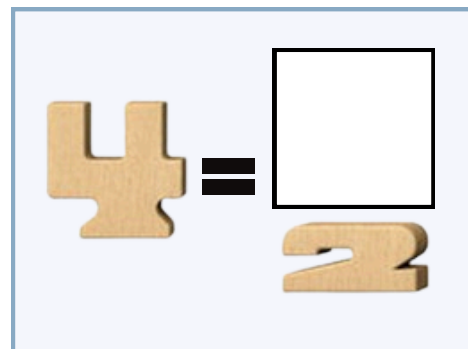
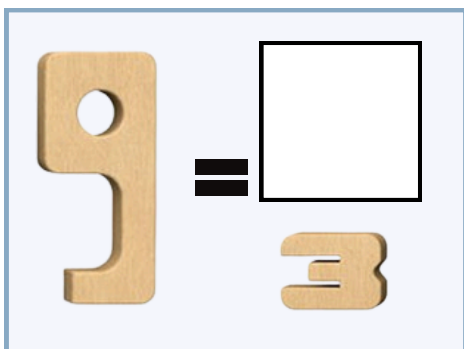
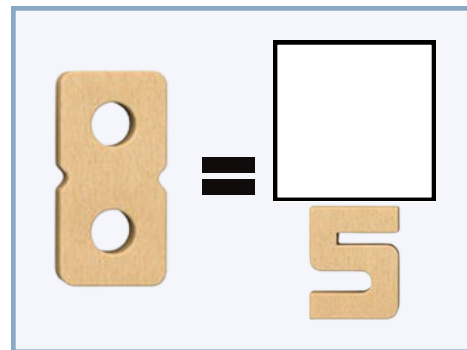

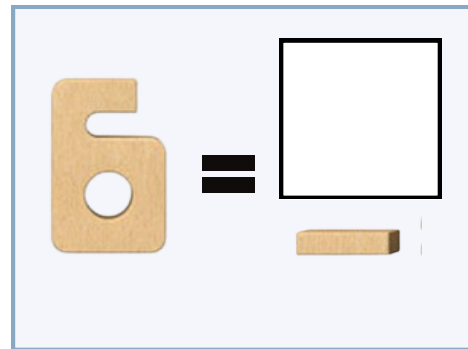
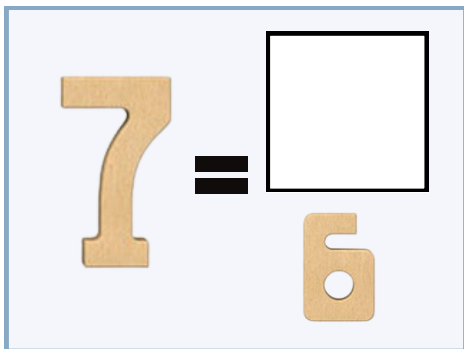
1. Observa els números i comença a jugar amb ells.
2. Esbrina quin número falta per formar el número gran.



# DESCOMPONEM AMB SUMBLOX

## INSTRUCCIONS

1. Observa els números i comença a jugar amb ells.
2. Esbrina quin número falta per formar el número gran.



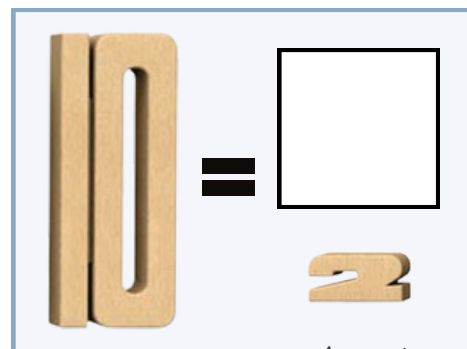
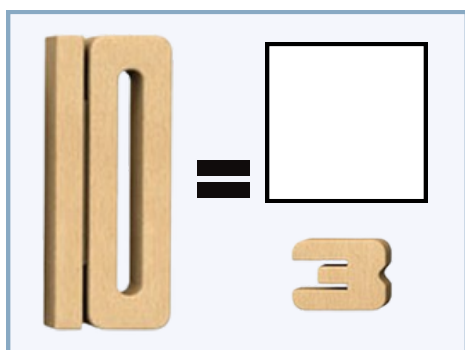
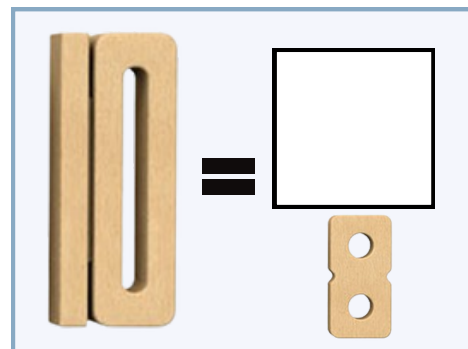
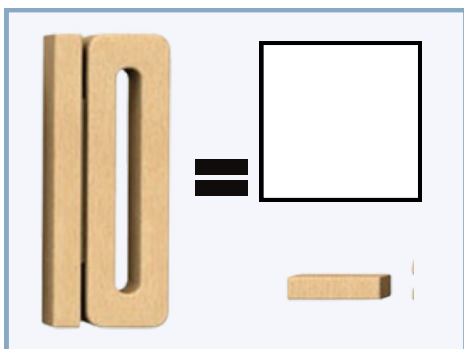
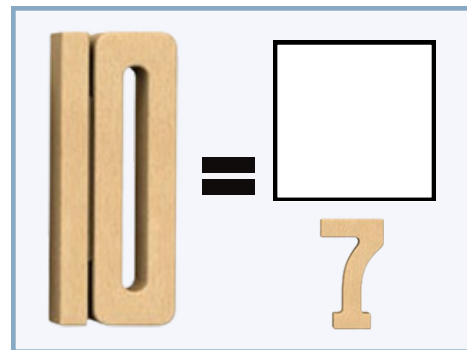
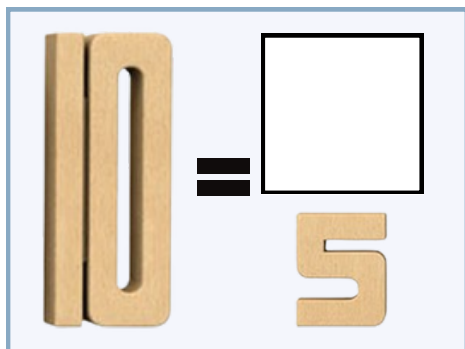
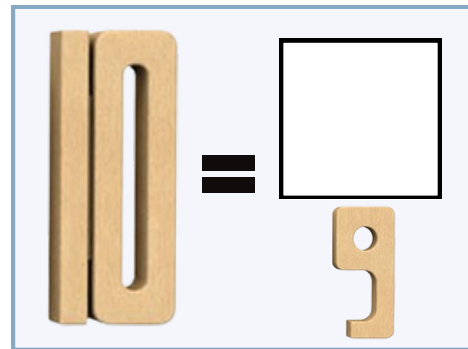
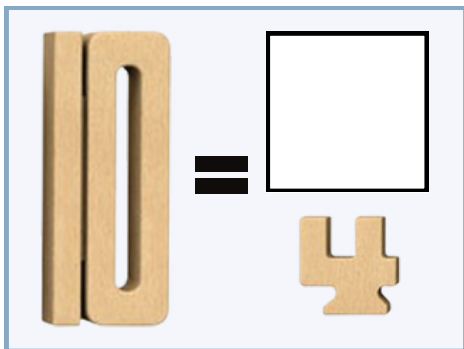
Nom:

Data:

# DESCOMPONEM AMB SUMBLOX

## INSTRUCCIONS

1. Observa els números i comença a jugar amb ells.
2. Esbrina quin número falta per formar el 10.



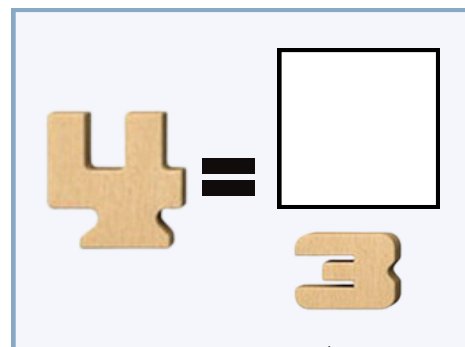
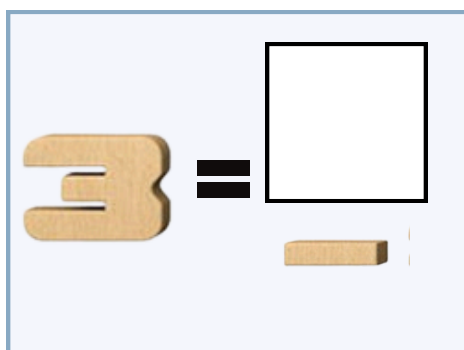
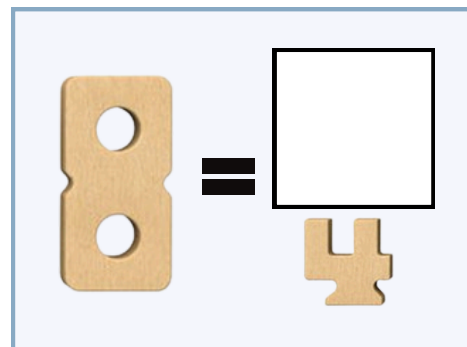
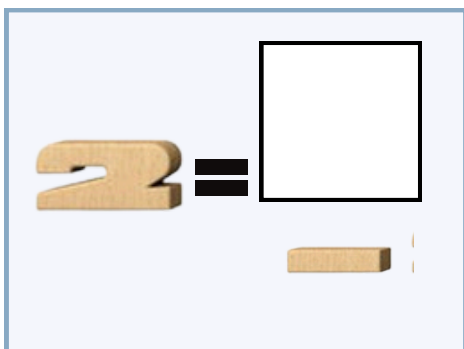
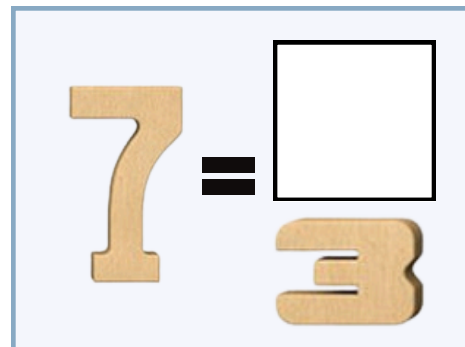
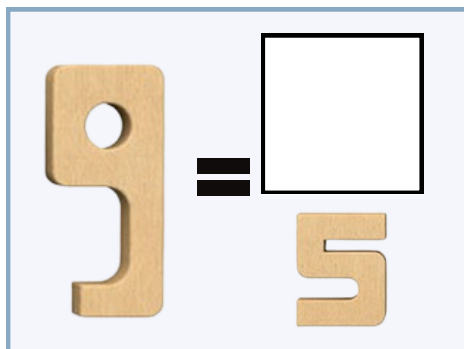
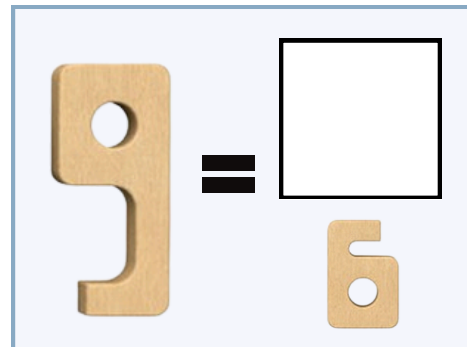
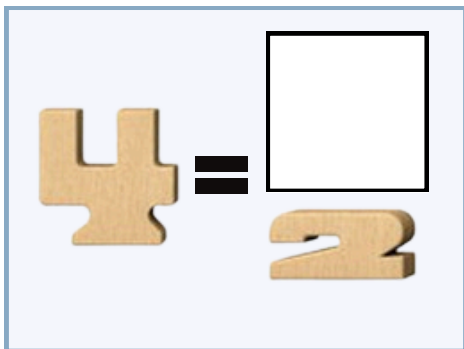
Nom:

Data:

# DESCOMPONEM AMB SUMBLOX

## INSTRUCCIONES

1. Observa els números i comença a jugar amb ells.
2. Esbrina quin número falta per formar el número gran.



Nom:

Data:

# DESCOMPONEM AMB SUMBLOX

## INSTRUCCIONES

1. Observa els números i comença a jugar amb ells.
2. Esbrina quin número falta per formar el número gran.

